



THE CEDARS SCHOOL

11+ Entrance Examination MATHEMATICS Specimen Paper

Time allowed: **1 hour**

Marks available: **90**

Answer all questions in the spaces provided.

Calculators may **not** be used.

NAME: _____

DATE OF BIRTH: _____

1. $7401 + 1649$

Answer _____

(2)

2. $9823 - 909$

Answer _____

(2)

3. 824×7

Answer _____

(2)

4. $15\ 045 \div 5$

Answer _____

(2)

5. Write down the number which is 9 more than eight hundred and ninety-six.

Answer _____ (2)

6. Fill in the missing numbers to make the sum correct:

$$\begin{array}{r} 6 \square 9 \\ + \square 3 6 \\ \hline 9 1 5 \end{array}$$

(2)

7. A rugby squad has 36 players. Four ninths of them did not play in the first two games of the season. How many played in at least one of these first two matches?

Answer _____

(2)

8. Jermaine buys 9 packets of throat lozenges for £5.85. How much would 4 packets cost him?

Answer _____

(2)

9. Fill in the numbers in each sequence:

(a) $1, \frac{1}{3}, \frac{1}{9}, \frac{1}{27}, \underline{\hspace{1cm}}, \underline{\hspace{1cm}}$

(b) $3.5, -0.5, -4.5, -8.5, \underline{\hspace{1cm}}, \underline{\hspace{1cm}}$

(c) $1, 1, 2, 3, 5, \underline{\hspace{1cm}}, \underline{\hspace{1cm}}$


(6)

10. A chocolate bar costs 62p. How many can Sophie buy with a £5 note?

Answer _____

(2)

11.

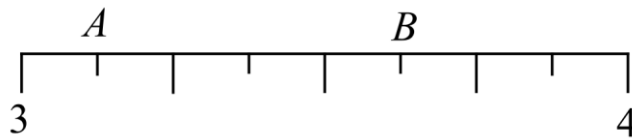


A man is standing facing East. Through how many degrees does he rotate to end up facing South-West if he rotates clockwise?

Answer _____

(2)

12. A ruler is marked as below:



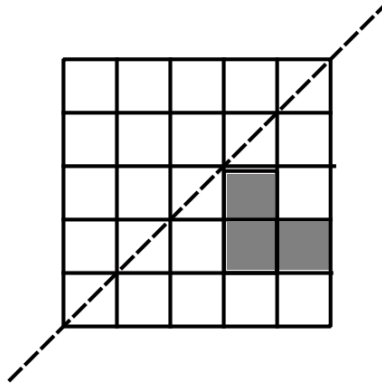
(a) What is the value of the marker at A? Express your answer as a fraction?

Answer _____

(b) Write the value of the marker at B as a decimal:

Answer _____ (3)

13.



(a) Reflect the shaded shape in the mirror line on the diagram above.

(b) If each small square has side length 1cm, what is the area of the shape before reflection?

Answer _____ cm²

(c) What is the perimeter of the shape before reflection?

Answer _____ cm

(3)

14. A film begins and ends at the following times:

START: 16:33

FINISH: 19:09

How long did the film last?

Answer _____ hours _____ minutes

(2)

15. Complete the calculations below:

(a) $251.9 \times 100 =$

(b) $\div 1000 = 2.03$

(2)

16. Write the missing sign (=, < or >) in the box.

$$17 \times 3 \quad \boxed{} \quad 25 \times 2$$

(1)

17. Which number between 60 and 80 is both a multiple of 3 and 8?

Answer _____

(2)

18. Emily thinks of her favourite number. She multiplies it by 2, subtracts 5 and gets 17.

What is Emily's favourite number?

Answer _____

(2)

19. (a) Write $\frac{3}{5}$ as a decimal.

Answer _____

(b) Write 0.85 as a fraction in lowest terms.

Answer _____

(c) What is $\frac{8}{24}$ as a fraction in lowest terms?

Answer _____

(d) Which is larger:

$$\frac{8}{24} \quad \text{or} \quad \frac{1}{4} \quad ?$$

Answer _____ (4)

20. Cyrus has five number cards:



He picks three cards to form a 3-digit number.

What cards could be pick to find:

(a) An even number?

Three empty 3x3 grids for digits.

(b) An odd number?

Three empty 3x3 grids for digits.

(c) A number divisible by 5?

Three empty 3x3 grids for digits.

His friend, Kevin, then asks him to choose the following from the five numbers:

(d) A two-digit prime number:

Two empty 3x3 grids for digits.

(e) A four-digit number divisible by 4:

Four empty 3x3 grids for digits.

(5)

21. Find the missing digits to make the calculation correct:

$$\begin{array}{r} 7 \square \\ \times \square \\ \hline 624 \end{array}$$

(2)

22. Mrs Walters asked all the children in Year 6 if they play tennis. The table below shows some of the results.

	Play tennis	Do not play tennis	Total
Class 6A	14		20
Class 6B		8	
Total		14	44

- (a) How many children are there in class 6A?

Answer _____

- (b) Complete the table.

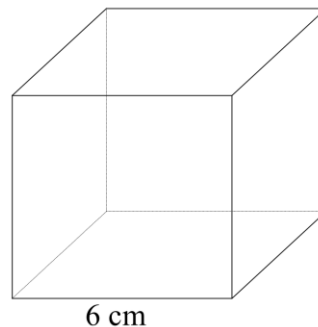
- (c) What fraction of the children who **don't** play tennis are in class 6B?

Answer _____

(6)

23. Here is a cube of side 6 cm.

Complete each sentence by writing the correct number in the space provided.



- (a) A cube has _____ vertices.

- (b) The volume of the cube shown is _____ cm^3 .

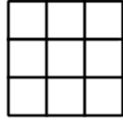
- (c) Multiplying the number of faces by the number of edges gives a product of _____.

- (d) A cuboid has the same volume as the cube shown. What could its length, width and height be?

Answer _____, _____ and _____

(5)

24. Shade $\frac{2}{3}$ of this shape.



(1)

25. Joanna and Suzanne set their watches to sound the alarm at 6.15am. Joanna's alarm then sounds every 8 minutes. Suzanne's alarm then sounds every five minutes.

At what time will the alarms next chime at the same time?

Answer _____

(2)

26. $125 \times 250 = 31250$

Use this calculation to work out:

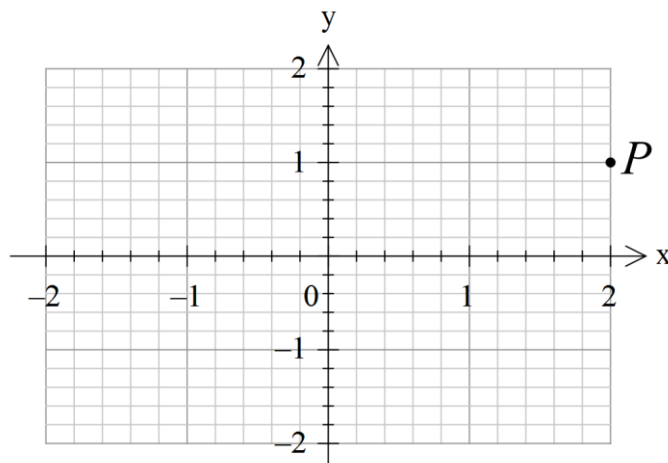
(a) $1.25 \times 250 =$ _____

(b) $31250 \div 250 =$ _____

(c) $1250 \times 2.5 =$ _____

(3)

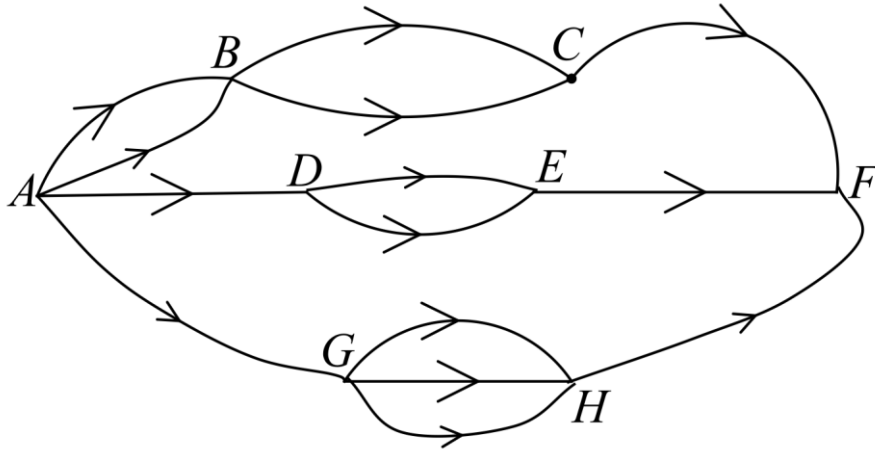
27.



Write down the coordinates of P: (_____, _____)

(1)

28.



Only going from left to right in the direction of the arrows,

(a) How many routes are there from A to C?

Answer _____

(b) How many routes are there from A to E?

Answer _____

(c) How many routes are there from A to H?

Answer _____

(d) How many routes are there in total from A to F?

Answer _____

(4)

29. Four years ago, the combined age of three children was 24 years.

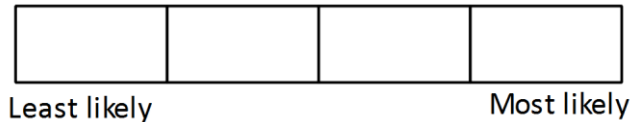
What will their combined age be in two years' time?

Answer _____

(2)

30. Arrange the letters for each of these events in order of likelihood, starting with the *least* likely.

- A Rolling two dice and getting two sixes;
- B That a person chosen at random was born on a Friday;
- C Rolling a dice and getting a three;
- D The last digit of a randomly chosen telephone number is *not* 4.



(4)

31. Three pet rabbits cost £19.70.
 The second rabbit costs £2 more than the first.
 The third rabbit costs 80p less than the second.
 What is the cost of the first rabbit?

Answer £ _____ : _____

(3)

32. In the table below, each of the letters has a different value. Use the sum of each row and column (shown) to find the value of each letter.

<i>A</i>	<i>B</i>	<i>C</i>	<i>B</i>	99
<i>C</i>	<i>B</i>	<i>B</i>	<i>A</i>	99
<i>A</i>	<i>C</i>	<i>A</i>	<i>C</i>	154
<i>B</i>	<i>A</i>	<i>C</i>	<i>B</i>	99
142	99	<i>D</i>	99	

$A = \underline{\hspace{2cm}}$; $B = \underline{\hspace{2cm}}$; $C = \underline{\hspace{2cm}}$; $D = \underline{\hspace{2cm}}$

(4)

33. A mathematical operation, denoted by the symbol \diamond , is defined such that: $a \diamond b = 3a - 2b$.

(a) What is the value of $5 \diamond 2$?

Answer _____

(b) Solve the equation:

$$y \diamond 6 = 15$$

$y =$ _____

(3)

END OF PAPER